

**Example 3**


State the fraction shaded in for each object below:

a)



$$\frac{1}{2}$$

b)




$$\frac{3}{4}$$

c)



$$\frac{1}{4}$$

d)




$$\frac{4}{4}$$

e)




$$\frac{5}{8}$$

f)




$$\frac{3}{8}$$

g)



$$\frac{8}{8}$$

h)




$$\frac{5}{8}$$

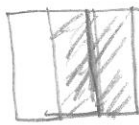
**Example 4**

Draw a picture representing each of the following fractions:

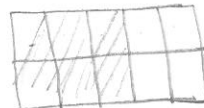
a)  $\frac{1}{5}$



b)  $\frac{2}{3}$



c)  $\frac{6}{10}$



d)  $\frac{3}{5}$

